




## أسئلة كتاب التمارين


### الكسر كجزء من مجموعة

أَكْتُبِ الْكَسْرَ الدَّالَّ عَلَى الشَّيْءِ الْمُلَوَّنِ، ثُمَّ أَقْرَأْهُ:

1   $\frac{3}{6}$


2   $\frac{3}{5}$


3   $\frac{3}{4}$


4   $\frac{7}{8}$

أَلَوِّنُ لِأُمْتَلِّ الْكَسْرَ الْمُعْطَى:

5  $\frac{5}{6}$  

6  $\frac{3}{4}$  

7  $\frac{2}{3}$  

8  $\frac{5}{7}$  

9  $\frac{3}{8}$  

10  $\frac{2}{5}$  